

Placement Test for Singapore Primary Mathematics 5B

1. Express $8\frac{5}{8}$ as a decimal correct to 2 decimal places. [2]

2. Multiply or divide.

(a) 515.02×43

(b) 81×1.29

[4]

(c) $2.8 \div 400$

(d) $1421 \div 7000$

[4]

3. Find the equivalent measures.

(a) $0.4 \text{ m} = \underline{\hspace{2cm}} \text{ cm}$

(b) $1.25 \text{ kg} = \underline{\hspace{1cm}} \text{ kg } \underline{\hspace{1cm}} \text{ g}$

[4]

(c) $305 \text{ ml} = \underline{\hspace{2cm}} \text{ L}$

(d) $0.75 \text{ ft} = \underline{\hspace{2cm}} \text{ in.}$

[4]

(e) $6.25 \text{ lb} = \underline{\hspace{1cm}} \text{ lb } \underline{\hspace{1cm}} \text{ oz}$

(f) $3.25 \text{ gal} = \underline{\hspace{1cm}} \text{ gal } \underline{\hspace{1cm}} \text{ c}$

[4]

Copyright © 2001 [SingaporeMath.com Inc.] All rights reserved.

This assessment test and answer key may be printed out and used by individuals at no cost. They may not be copied or incorporated into any other document. Please see legal (<http://www.singaporemath.com/terms.asp>) for more information.

4. Express each as a percentage. [2]
(a) 0.47

(b) $\frac{6}{15}$ [2]

(c) 215 out of 500 [2]

5. Express each percentage as a decimal and as a fraction in its simplest form. [3]

(a) 85% Decimal: _____ Fraction: _____

(b) 16% Decimal: _____ Fraction: _____ [3]

6. Find 32% of \$96. [2]

7. Find the average of 21.4, 18.2, and 65.7. [2]

8. Fill in the blank: The average of 42, 36, _____, and 25 is 30. [3]

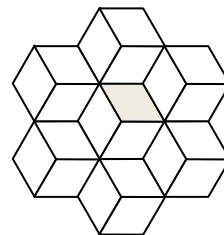
9. John had \$75. He spent \$15 on a book. What percentage of his money does he have left? [4]

10. The normal price of a camera was \$76. At a sale it was sold at a discount of 15%. What was the selling price of the camera? [4]

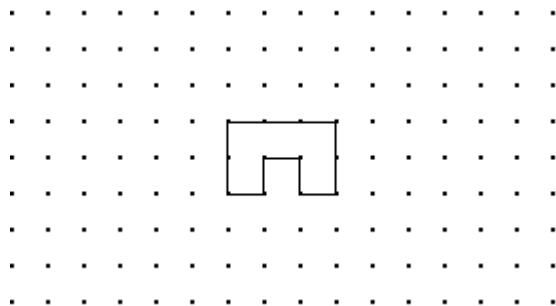
11. The average weight of 3 packages is 2 kg 750 g. The average weight of 2 of them is 3 kg 200 g. Find the weight of the third package. Give your answer in kg and g. [5]

12. In a city, the rate for taxi fare for the first kilometer is \$2.60 and for every additional kilometer it is \$0.80. Find the taxi fare for a journey of 6.5 km. [5]

13. The drawing shown at the right is an example of a tessellation using a rhombus. [2]

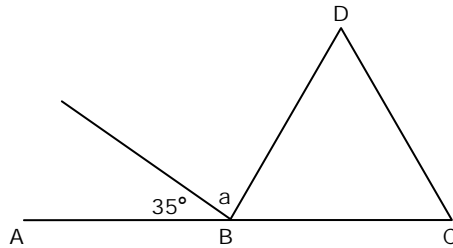


Use the shape given below to make a tessellation in the space provided.

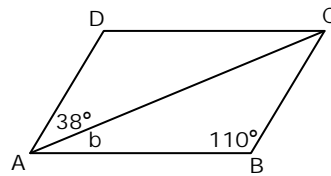


14. The following figures are not drawn to scale. Find the unknown marked angle in each.

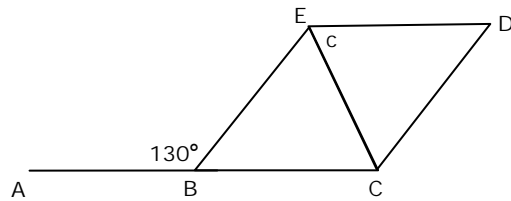
(a) ABC is a straight line. BCD is an equilateral triangle. [3]



(b) ABCD is a parallelogram. [3]



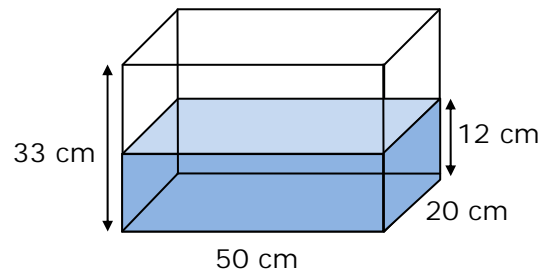
(c) ABC is a straight line. BCDE is a rhombus. [3]



15. A rectangular tank measures 50 cm by 20 cm by 33 cm. It is to be filled with water from a tap. It takes 2 minutes to fill it to a height of 12 cm.

(a) What is the rate of flow from the tap in liters per minute?

[4]



(b) How many more minutes will it take to fill the tank?

[2]

16. A rectangular container 8 cm long and 9 cm wide was filled with water to a depth of 6 cm. When 12 marbles of equal size were added to the container, the depth of the water became 7.5 cm. Find the volume of one marble.

[5]

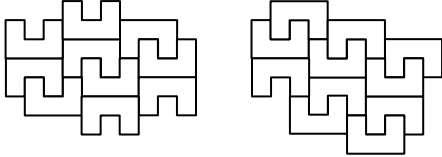
17. How many 4-cm cubes can fit into a rectangular box 1 m long, 0.4 m wide, and 0.6 m high? [5]

18. Sam had \$85 and John had \$220. They were each given an equal amount of money. Then John had twice as much money as Sam. How much money did each boy receive? [5]

19. Alice has 50% of the amount of money Betty has, and Carrie has $\frac{2}{5}$ of what Alice has. If Betty has \$364 more than Carrie, how much money does Alice have? [5]

20. The length of one side of a cube is 1 ft. What is its volume in cubic inches? [4]

Answer Key

- (a) 8.63
- (a) 22,145.86 (b) 104.49
(c) 0.007 (d) 0.203
- (a) **40** cm (b) **1** kg **250** g
(c) **0.305** L (d) **9** in.
(e) **6** lb **4** oz (f) **3** gal **4** c
- (a) 47% (b) 40% (e) 43%
- (b) 0.85, $\frac{17}{20}$
(c) 0.16, $\frac{4}{25}$
- \$30.72
- 35.1
- 17
- 80%
- \$64.60
- 1 kg 850 g
- \$7.40
- Answers will vary.

- (a) 85° (b) 32° (c) 65°
- (a) 6 L/min (b) 3.5 min
- 9 cm³
- 3750 4-cm cubes
- \$50
- \$227.50
- 1728 in.³

Copyright © 2001 [SingaporeMath.com Inc.] All rights reserved.

This assessment test and answer key may be printed out and used by individuals at no cost. They may not be copied or incorporated into any other document. Please see legal (<http://www.singaporemath.com/terms.asp>) for more information.