

# Placement Test for Singapore Primary Mathematics 2B

1. Fill in the blanks with the missing numbers.

(a) \_\_\_\_\_ - 18 = 54 [2]

(b) 58 + \_\_\_\_\_ = 72 [2]

(c) 48 - \_\_\_\_\_ = 19 [2]

2. Use mental math to solve:

(a) 42 + \_\_\_\_\_ = 100 (b) 785 + 60 = \_\_\_\_\_ [4]

(c) 99 + 37 = \_\_\_\_\_ (d) 450 - 70 = \_\_\_\_\_ [4]

(e) 87 - 16 = \_\_\_\_\_ (f) 712 - 99 = \_\_\_\_\_ [4]

3. Fill in the blanks:

(a) 6 x 4 = \_\_\_\_\_ (b) 5 x 5 = \_\_\_\_\_ [4]

(c) 5 x 8 = \_\_\_\_\_ (c) 28 ÷ 4 = \_\_\_\_\_ [4]

(e) 35 ÷ 5 = \_\_\_\_\_ (d) 40 ÷ 4 = \_\_\_\_\_ [4]

4. 32 cookies were divided among some children. Each child got 4 cookies. How many children were there? [3]

5.	Mrs. Li paid \$30 for 5 kg of apples. What was the cost of 1 kg of apples?	[3]	
6.	Paul read 10 pages of book a day. After reading the book each day for a week, he still had 45 pages to read.		
	(a) How many pages did he read in the week?	[3]	
	(b) How many pages were in the book?	[2]	
7.	203¢ = \$_____	[1]	
8.	Add or subtract.		
	(a) $\begin{array}{r} \$4.65 \\ + \$2.85 \\ \hline \end{array}$	(b) $\begin{array}{r} \$5.35 \\ - \$2.75 \\ \hline \end{array}$	[4]
9.	Paul wanted to buy two candy bars. One cost \$0.55 and the other cost \$0.35. He gave the cashier 4 quarters. How much change did he receive?	[3]	

10. Use mental math to solve.

(a)  $\$6.05 + \$2.85 = \$\_\_\_\_\_\_$  [2]

(b)  $\$3.60 - 15\text{¢} = \$\_\_\_\_\_\_$  [2]

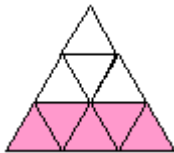
(c)  $\$3 - 55\text{¢} = \$\_\_\_\_\_\_$  [2]

(d)  $\$10 - \$8.95 = \$\_\_\_\_\_\_$  [2]

(e) A toy robot costs \$6.90. A doll costs \$4.85. How much less does the doll cost than the robot? [3]

(f) Mark spent \$2.35 on lunch. His brother spent 65¢ more. How much did his brother spend? [3]

11. What fraction of the shape is shaded? [2]



12.  $\frac{4}{7}$  and  $\_\_\_\_\_\_$  make 1 whole. [1]

13. Arrange the fractions in order, beginning with the smallest. [2]

$$\frac{1}{6} \quad \frac{1}{8} \quad \frac{1}{2} \quad \frac{1}{3}$$

\_\_\_\_\_ / \_\_\_\_\_ / \_\_\_\_\_ / \_\_\_\_\_

14. Fill in the blanks.

(a)



It is \_\_\_\_\_:\_\_\_\_\_.

[2]

It is \_\_\_\_\_ minutes to \_\_\_\_\_

(b)



John left his house at 9:45 a.m. He took 25 minutes to drive to the store. He arrived at

[2]

\_\_\_\_\_ a.m. or p.m.? \_\_\_\_\_

(c)



David went on to visit friends. He left at 10:30 a.m. and came back home 3 hours later. He got

[2]

home at \_\_\_\_\_ a.m. or p.m.? \_\_\_\_\_

(d)



A test started at 10:30 a.m.

[1]

It ended at 11:20 a.m. How long did it last?

It lasted \_\_\_\_\_ minutes.

15. True or False?

(a) A quart container holds more water than a gallon container.

[1]

\_\_\_\_\_

(b) A pint is less than a quart. \_\_\_\_\_

[1]


16. A tank can hold 8 pails of water. The capacity of the pail is 4 liters. What is the capacity of the tank?

[3]

17. The capacity of a jug is 3 liters. Kerry needs 18 liters of juice for a party. How many jugs of juice will she have to make?


[3]


18. This picture graph shows the amounts of money four girls have.




Each  stands for 4 dollars

- (a) Jo has \_\_\_\_\_ dollars more than Amy. [2]
- (b) Beth has \_\_\_\_\_ dollars less than Meg. [2]
- (c) Meg used all her money to buy some dolls. Each doll cost \$6. She bought \_\_\_\_\_ dolls. [2]
- (d) Paula has \$24. If her information were added to the table, \_\_\_\_\_ stars would be used to show how much money she has. [2]

19.  This shape has \_\_\_\_\_ flat face(s) and \_\_\_\_\_ curved face(s). [2]

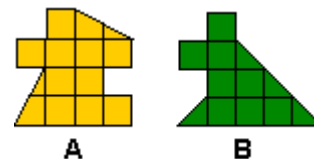
20.  Draw lines to show how this shape is formed using a rectangle, a triangle, and a semicircle [2]

21. Study the pattern. Draw the shape that comes next. [2]

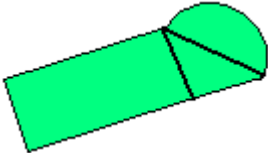



22. (a) Which shape is larger, A or B? \_\_\_\_\_ [1]

(b) How much larger? \_\_\_\_\_ square units [2]



## Answer Key

1. (a) 72 (b) 14 (c) 29
2. (a) 58 (b) 845  
(c) 136 (d) 380  
(e) 71 (f) 613
3. (a) 24 (b) 25  
(c) 40 (d) 7  
(e) 7 (f) 10
4. 8 children
5. \$6
6. (a) 70 pages (b) 115 pages
7. 2.03
8. (a) \$7.50 (c) \$2.60
9. \$0.10
10. (a) 8.90 (b) 3.45  
(c) 2.45 (d) 1.05  
(e) \$2.05 (f) \$3.00
11.  $\frac{5}{9}$
12.  $\frac{3}{7}$
13.  $\frac{1}{8}$   $\frac{1}{6}$   $\frac{1}{3}$   $\frac{1}{2}$
14. (a) 1:50; 10; 2 (b) 10:10 a.m.  
(c) 1:30 p.m. (d) 50
15. (a) false (b) true
16. 32 liters
17. 6 jugs
18. (a) 12 (b) 4  
(c) 2 (d) 6
19. 5:0
20. 
21. 
22. (a) A (b) 2

Copyright © 2001 [SingaporeMath.com Inc.] All rights reserved.

This assessment test and answer key may be printed out and used by individuals at no cost. They may not be copied or incorporated into any other document. Please see legal (<http://www.singaporemath.com/terms.asp>) for more information.