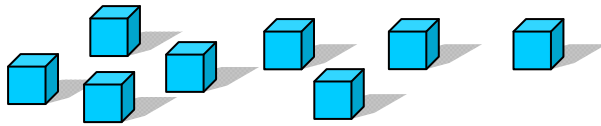
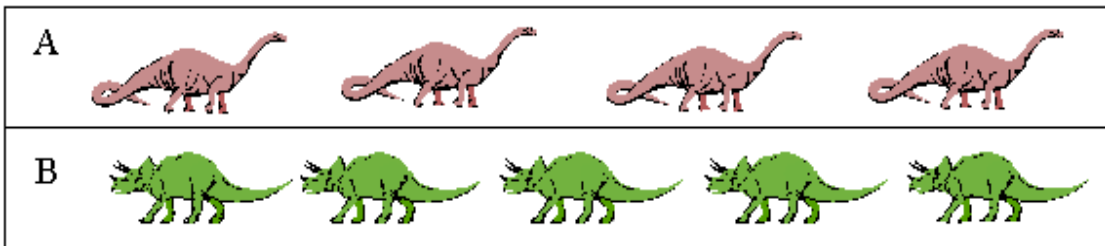


Placement Test for Singapore Primary Mathematics 1A

1. Count and write the number in the box. [2]



2. Which set has more? Circle A or B. [2]



3. Fill in the missing numbers. [2]

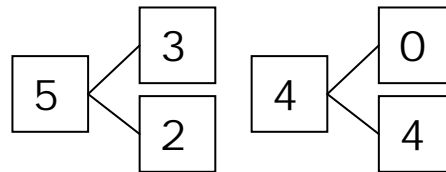
(a)

	2	3		5
--	---	---	--	---

(b)

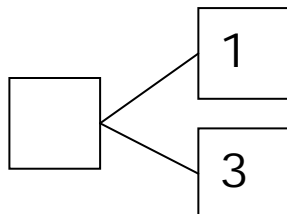
9		7	6	
---	--	---	---	--

4. 5, 3, and 2 make a number bond.
4, 0, and 4 also make a number bond.

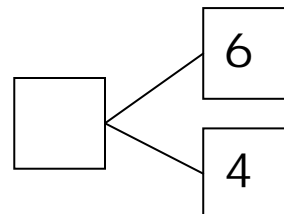


Write the missing number for the number bonds.

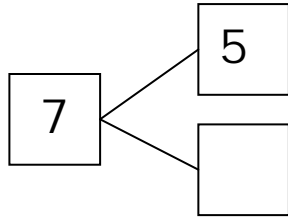
(a)



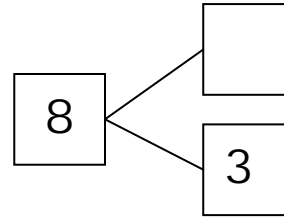
(b)



(c)




(d)



[4]

5. Write 3 more addition or subtraction sentences.


[6]

$\boxed{4} + \boxed{3} = \boxed{7}$

$\boxed{} - \boxed{} = \boxed{}$

$\boxed{} + \boxed{} = \boxed{}$

$\boxed{} - \boxed{} = \boxed{}$

6. Fill in the blanks.

(a) $0 + 6 = \underline{\hspace{2cm}}$

(b) $7 + 2 = \underline{\hspace{2cm}}$

[4]

(c) $7 + \underline{\hspace{2cm}} = 10$

(d) $8 - 3 = \underline{\hspace{2cm}}$

[4]

(e) $10 - 4 = \underline{\hspace{2cm}}$

(f) $9 - 6 = \underline{\hspace{2cm}}$

[4]

7. Mary used 4 eggs to bake a cake and 2 eggs to bake cookies. How many eggs did she use?

[4]

She used eggs.

8. There are 6 red and blue balls. 3 of them are red. How many are blue? [4]

There are _____ blue balls.

9. Pat lost 3 balloons to the wind. She had 6 balloons left. How many balloons did she have at first? [4]

She had _____ balloons

10. Look at these letters.

A B C D E F G H I J K

(a) Which letter is third? _____ [2]

(b) Which letter is second from the right? _____ [2]

11. Fill in the blanks.

(a) What number comes after 12? _____ [2]

(b) What number comes before 19? _____ [2]

(c) $10 + 5 =$ _____ [2]

(d) $10 +$ _____ $= 17$ [2]

(e) $14 =$ _____ tens and _____ ones [2]

(f) _____ $+ 3 = 13$ [2]

(g) Which is greater, 14 or 17? _____ [2]

12. Fill in the blanks

(a) $13 + 2 = \underline{\hspace{2cm}}$ (b) $7 + 5 = \underline{\hspace{2cm}}$ [4]

(c) $6 + \underline{\hspace{2cm}} = 12$ (d) $13 - 9 = \underline{\hspace{2cm}}$ [4]

(e) $16 - 4 = \underline{\hspace{2cm}}$ (f) $15 - 7 = \underline{\hspace{2cm}}$ [4]

13. John has 8 marbles. Paul gave him 9 more. How many marbles does John have now? [4]

John has marbles.

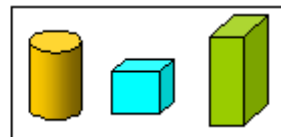
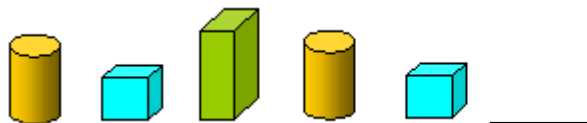
14. Sally needs 15 balloons for a party. She has 11 balloons now. How many more balloons does she need? [4]

She needs more balloons.

15. Mary has 14 stickers. Pam has 8 fewer than Mary. How many stickers does Pam have? [4]

Pam has stickers.

16. Circle the one in the box that comes next. [2]



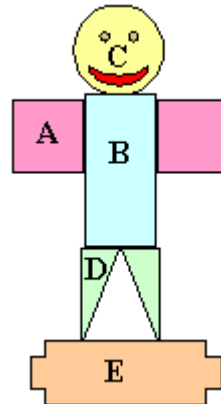
17. The man is made up of shapes labeled with letters. Which shape is a

(a) square? _____

(b) circle? _____

(c) triangle? _____

(d) rectangle? _____



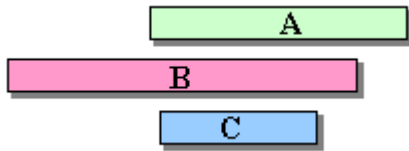
[1]

[1]

[1]

[1]

18. Which is longest, A, B, or C? _____



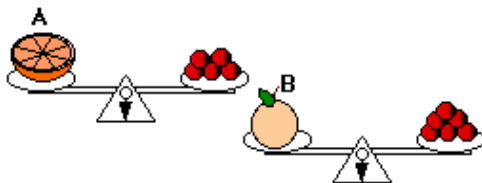
[2]

19. The paper clip is a unit. The pencil is _____ units long.




[2]

20. Which is heavier, A or B? _____



[2]

Answer Key

1. 8
2. B
3. (a) 1, 4 (b) 8, 5
4. (a) 4 (b) 10
(c) 2 (d) 5
5. $3 + 4 = 7$, $7 - 3 = 4$; $7 - 4 = 3$
6. (a) 6 (b) 9
(c) 3 (d) 5
(e) 6 (f) 3
7. 6
8. 3
9. 9
10. (a) C (b) J
11. (a) 13 (b) 18
(c) 15 (d) 7
(e) 1, 4
(f) 10 (g) 17
12. (a) 15 (b) 12
(c) 6 (d) 4
(e) 12 (f) 8
13. 17
14. 4
15. 6
16. 
17. (a) A (b) C
(d) D (d) B
18. B
19. 8
20. B

Copyright © 2001 [SingaporeMath.com Inc.] All rights reserved.

This assessment test and answer key may be printed out and used by individuals at no cost. They may not be copied or incorporated into any other document. Please see legal (<http://www.singaporemath.com/terms.asp>) for more information.